


WINNIE THE POOH IN THE HUNDRED ACRE WOOD

WORKSHEET 1

Name _____ Date _____












1. What is directly south of Rabbit's house? woods
2. What is east of Christopher Robin's playroom? log by the river
3. What is north of Piglet's house? Pooh's house
4. What is north of Rabbit's house? Bee tree
5. Whose house is in the southeast corner? Eeyore's
6. Where is the picnic table? Answers will vary.
7. How will Piglet get from his house to Kanga's house?
He will go north.
8. How will Rabbit get from his house to the bridge?
He will go south, then west. (Or west to the Sandy Pit, then south.)
9. How will Pooh get from his Thoughtful Spot to Owl's house?
He will go south to Pooh's house, then east. (Or east to the Woods, then south.)

WINNIE THE POOH IN THE HUNDRED ACRE WOOD

WORKSHEET 2

Name: _____ Date: _____

Pooh is on a honey hunt. You can help save him time by writing the grid numbers of the boxes with bees in them. (For as you know, "where there are bees, there is honey" is a Pooh thought.)

	A	B	C	D	E	F
1					14 	
2	 10	11	12	 13		15
3	9					 16
4	8	 4				
5	7	5	 3			
6	 6			2	 1	

Places for Pooh to look:

A - 2, A - 6, B - 4, C - 5, D - 2, E - 1,
E - 6, F - 6.

Now chart the shortest path for Pooh to follow to collect all his honey. (Pooh can move diagonally.)

E - 6 to D - 6* to C - 5 to B - 4 to B - 5 to * or D-5
A - 6 to A - 5 to A - 4 to A - 3 to A - 2 to
B - 2 to C - 2 to D - 2 to E - 1 to F - 2* to * or E-2
F - 3 to ____ to ____ to ____ to ____ to ____ to

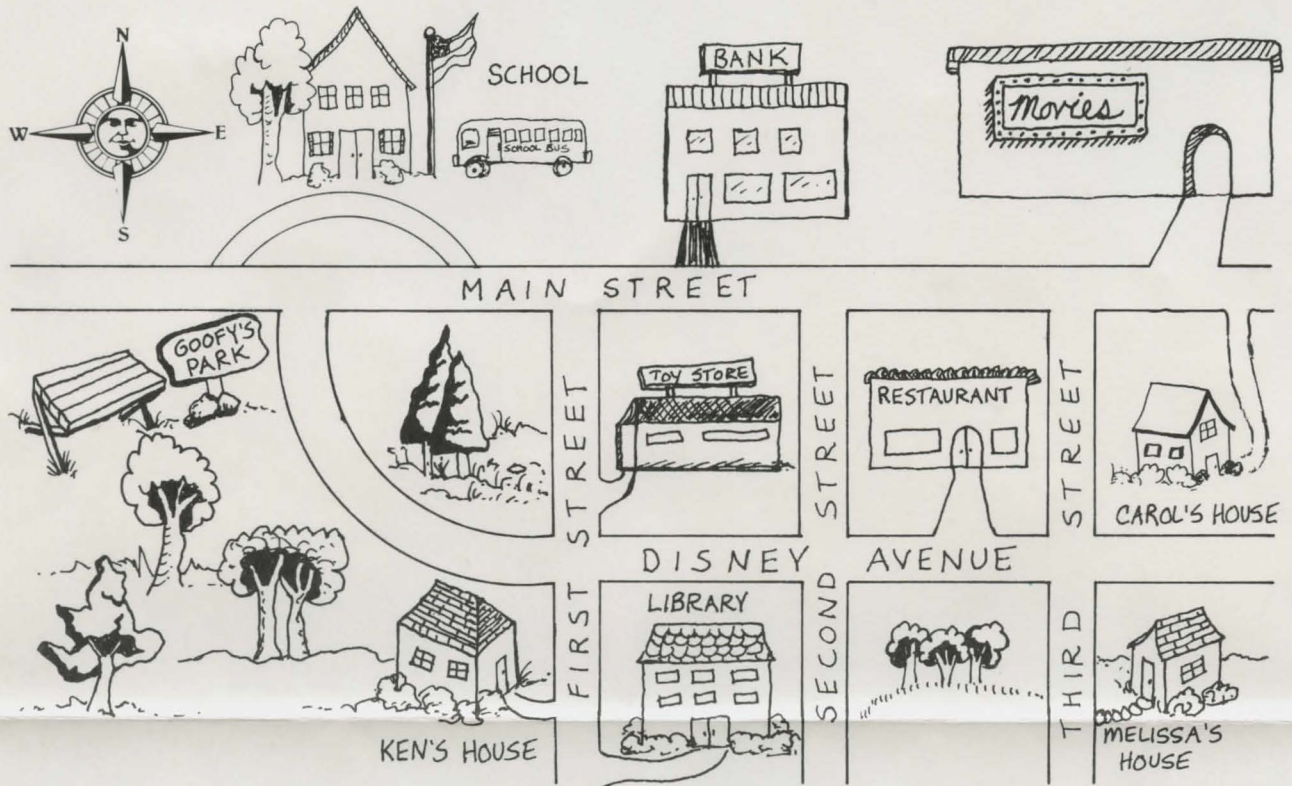
How many steps did it take you? 16

Are you sure this was the shortest way?

WINNIE THE POOH IN THE HUNDRED ACRE WOOD

WORKSHEET 3

Name: _____ Date: _____



It is Saturday, and Melissa, Ken, and Carol want to meet at the toy store, go to the restaurant for lunch, and then go to the movies. Read the map shown here. Write the directions for each friend to follow from his/her home to the movies. Be sure to have each one stop at the toy store and the restaurant first.

Melissa: *Answers will vary.*

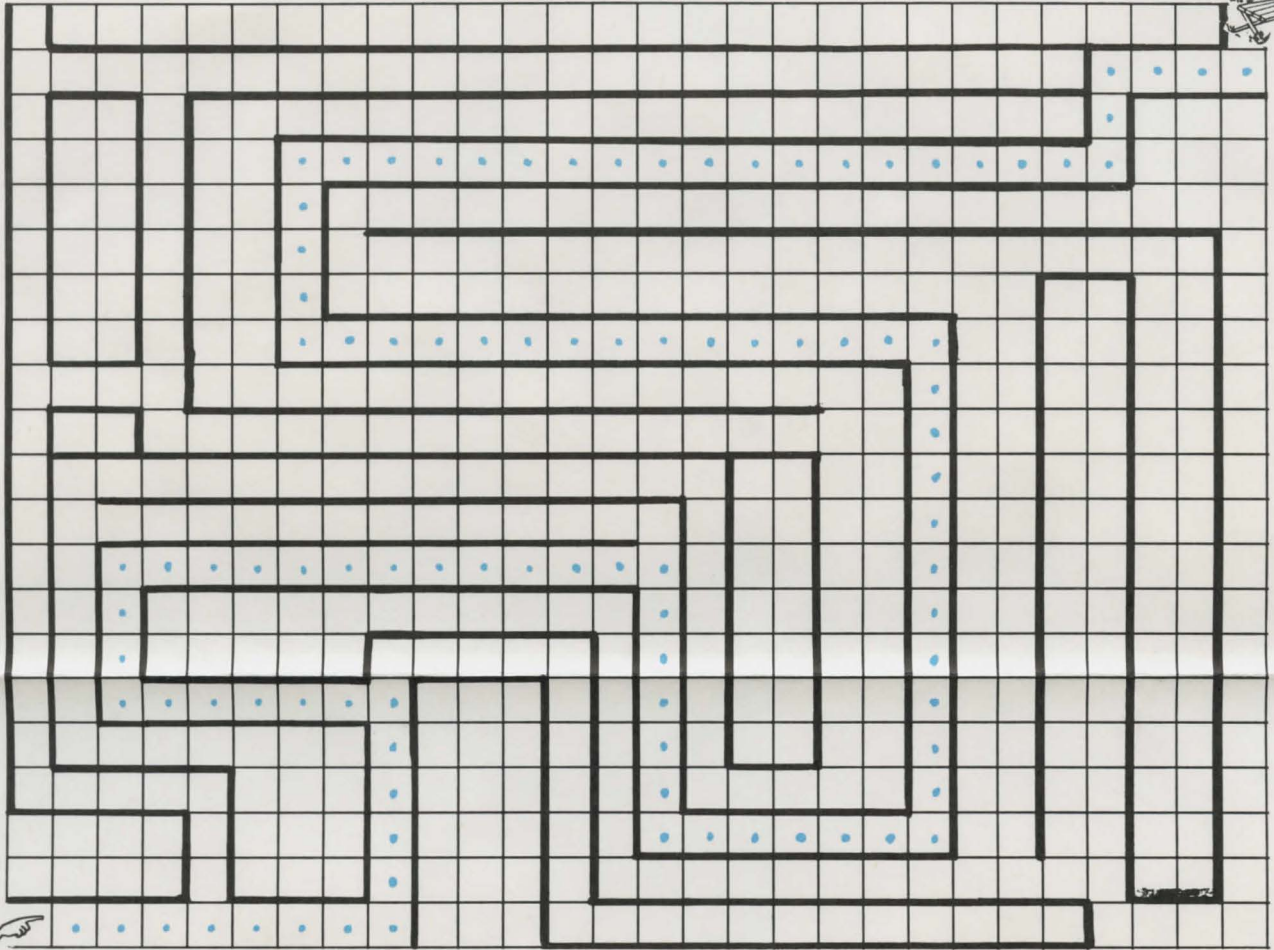
Ken: *Answers will vary.*

Carol: *Answers will vary.*

WINNIE THE POOH IN THE HUNDRED ACRE WOOD

WORKSHEET 4

Name: _____ Date: _____



Christopher Robin has packed a picnic lunch. Find the correct path for him to use to travel to the picnic area. Write the directions for Pooh and Piglet so they can follow the same path later. Pooh will understand if you just tell him how many squares to go north, south, east, or west at a time.

Example: 3 north

2 east, and so on. (Hint: Do not count the box Christopher Robin is in.)

8E, 5N, 6W, 3N, 12E, 6S, 6E, 11N, 14W, 4N, 18E, 2N, 3E